

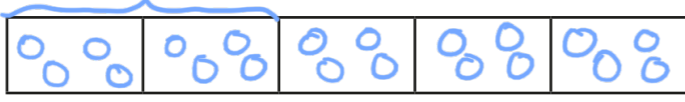


Fractions of a set of objects (2)

1 Draw counters in the bar models to help you complete each number sentence.

a) $\frac{2}{3}$ of 15 = 

b) $\frac{3}{4}$ of 8 = 

c) $\frac{2}{5}$ of 20 = 

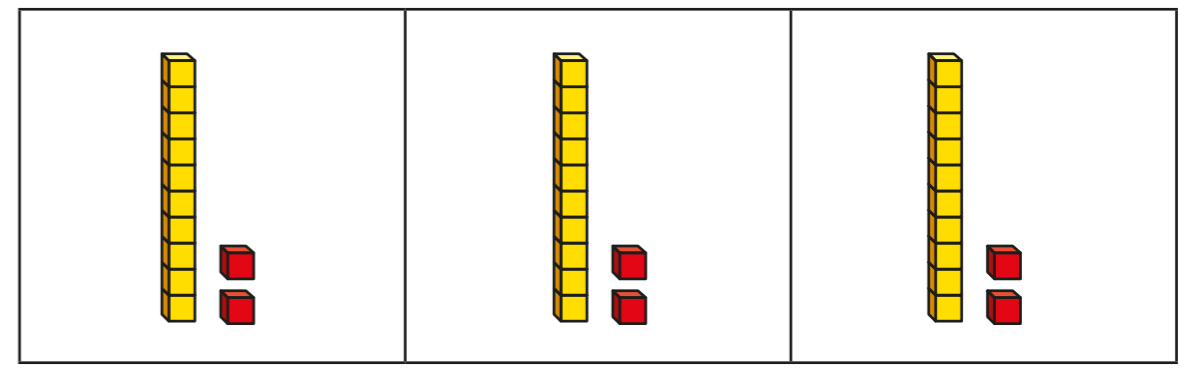
2 Match the questions and answers.

$\frac{2}{3}$ of 9 = ?		9
$\frac{3}{5}$ of 15 = ?		6
$\frac{5}{6}$ of 12 = ?		15
$\frac{3}{4}$ of 20 = ?		10

3 What is $\frac{6}{6}$ of 18?

How do you know? 

4 Brett uses a bar model and base 10 to find $\frac{2}{3}$ of 36



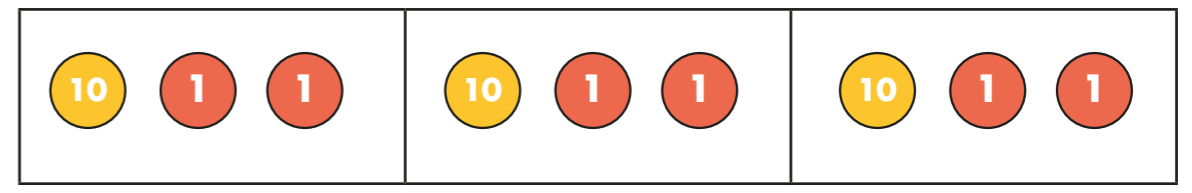
Use Brett's method to complete the number sentences.

a) $\frac{2}{3}$ of 63 =

b) $\frac{3}{4}$ of 48 =

c) $\frac{3}{4}$ of 92 =

5 Kim uses a bar model and place value counters to find $\frac{2}{3}$ of 36



Use Kim's method to complete the number sentences.

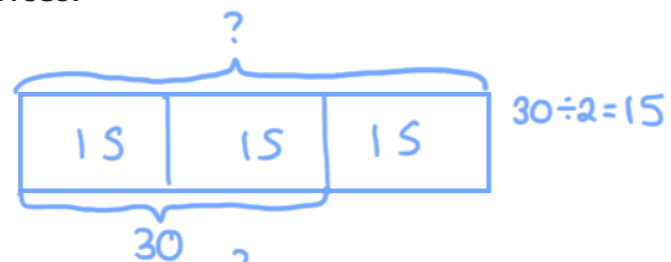
a) $\frac{2}{3}$ of 96 =

b) $\frac{3}{5}$ of 60 =

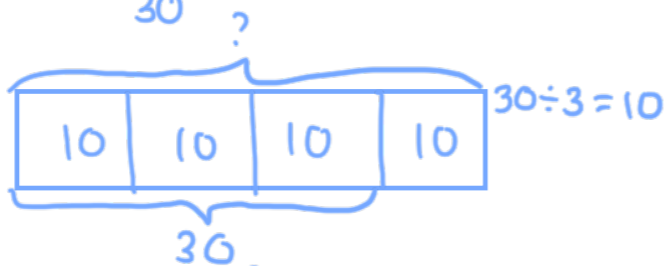
c) $\frac{3}{4}$ of 52 =

6 Complete the number sentences.

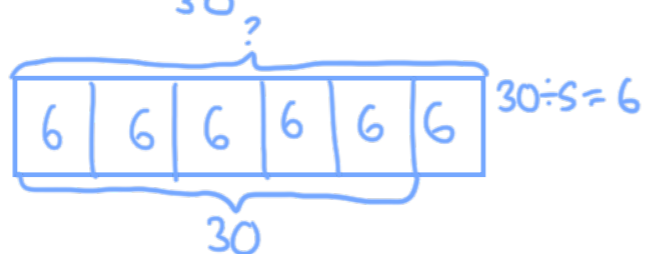
a) $\frac{2}{3}$ of $\boxed{45} = 30$



b) $\frac{3}{4}$ of $\boxed{40} = 30$



c) $\frac{5}{6}$ of $\boxed{36} = 30$



7



Tommy

To find $\frac{3}{4}$ of 12, you divide by 4 and then multiply the answer by 3

To find $\frac{3}{4}$ of 12, you divide by 3 and then multiply the answer by 4



Dexter

Who is correct? Tommy

How do you know? Show your working.

8 Dora, Whitney and Ron each find a fraction of 24 using counters.

Dora: I have $\frac{5}{6}$ of 24

Whitney: I have $\frac{2}{3}$ of 24

Ron: I have 18 counters.

a) Who has the most counters? Show your workings.

$\frac{5}{6}$ of 24 = 20 $\frac{2}{3}$ of 24 = 16

Dora

b) How many more counters does Dora have than Whitney?

$20 - 16 = 4$ $\boxed{4}$

9 Write fractions to make the statements correct.

- e.g.
- $\frac{1}{6}$ of 36 < 18
 - $\frac{1}{2}$ of 36 = 18
 - $\frac{3}{4}$ of 36 > 18

How many different answers can you find for each? Compare with a partner.