

Add and subtract 1s

1 a) Jack has 6 cookies.



Annie gives him one more cookie.
How many cookies does he have now?

Jack has cookies now.



b) Amir has 4 cookies.



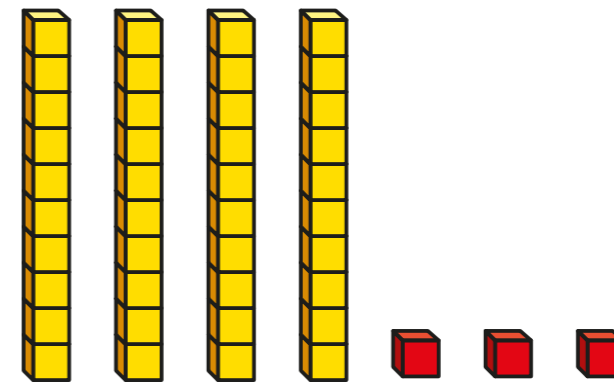
He eats one of his cookies.
How many cookies does he have now?

Amir has cookies now.

2 Complete the number tracks.



3 a) Filip has made a number using base 10



What number has Filip made?

b) Rosie also makes a number using base 10
Rosie's number is one more than Filip's number.

What is Rosie's number?



c) Ron's number is 2 more than Filip's number.

What is Ron's number?

45

d) Dora's number is 1 less than Filip's number.

What is Dora's number?

42

4 Complete the calculations.

a) $14 + 1 =$

15

e) $19 - 1 =$

18

b) $22 + 1 =$

23

f) $33 +$

1

$= 34$

c) $54 + 1 =$

55

g) $18 = 19 -$

1

d) $62 = 1 + 61$

h) $88 = 89 - 1$

5 Complete the calculations.

a) $14 + 2 =$

16

e) $19 - 2 =$

17

b) $22 + 3 =$

25

f) $33 +$

2

$= 35$

c) $54 + 4 =$

58

g) $12 = 19 -$

7

d) $66 = 5 + 61$

h) $86 = 89 - 3$

6 Are the number sentences true or false?

a) $17 + 1 = 1 + 17$

True

b) $17 - 1 = 1 - 17$

False

Talk about your answers with a partner.

