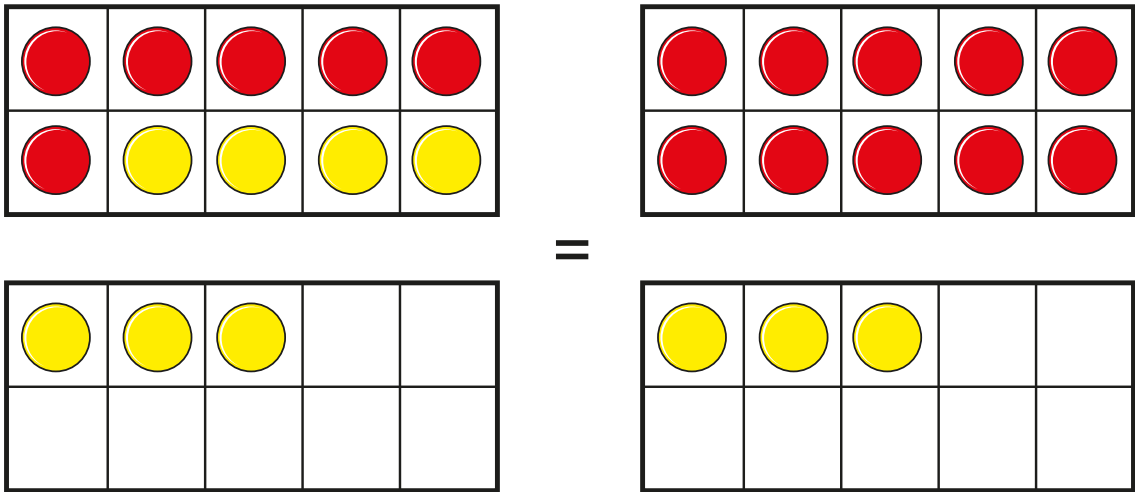
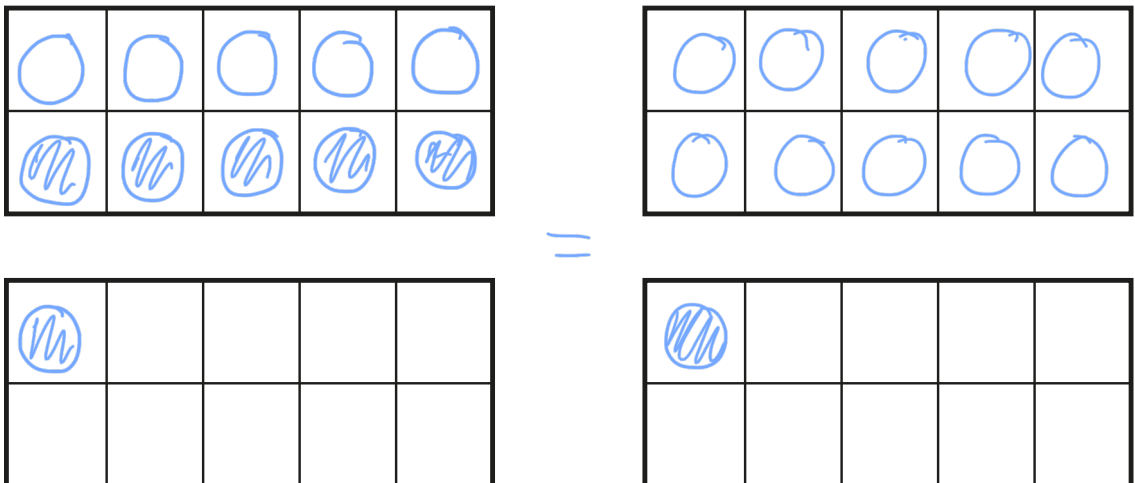


Add by making 10

I The ten frames show that $6 + 7$ is the same as $10 + 3$



Draw counters to show that $5 + 6$ is the same as $10 + 1$





2 Complete the additions.

Use ten frames to help you.

a) $8 + 3 = 10 +$

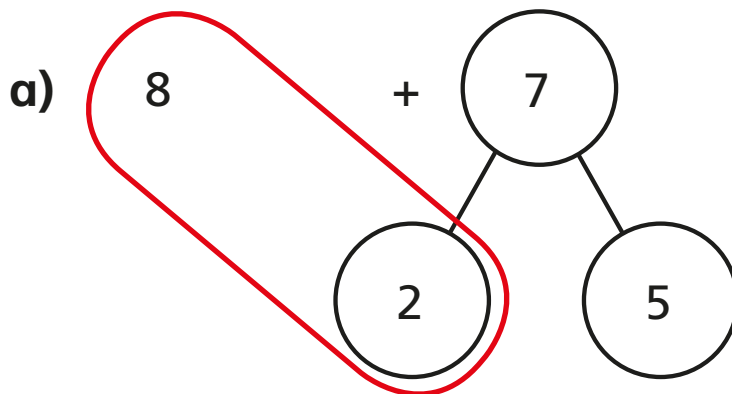
b) $9 + 7 = 10 +$

c) $7 + 5 = 10 +$

d) $6 + 8 = 10 +$

3 Use number bonds to complete the additions.

The first one has been done for you.



10 + 5 = 15

b)

$$5 + 8 = 13$$

$10 + 3 = 13$

c)

$$6 + 9 = 15$$

$10 + 5 = 15$